




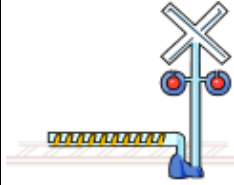




## Shopping Word Problems—Train Set

train engine— £15 	rails—£5 	bridge—£12 	platform—£20 
tree—£4 	signal—£6 	truck—£9 	carriage—£10 

1. Kieran buys a train engine and a carriage. How much does he pay?
2. Saima buys a signal and rails. How much does she pay?
3. Billy buys a truck, a bridge and a tree. How much does he pay?
4. How much will a platform, rails and a carriage cost?
5. How much do you need to buy a train engine, a signal and two trees?
6. How many trees can I buy with £20?

Change:

1. Farhad uses £20 to buy three trees. How much change will he get?
2. Sadiq has £10. How much more does he need if he wants to buy rails and a signal?
3. Masiti uses £20 to pay for a carriage and two rails. How much change should she get?
4. How much change will I get if I use £20 to pay for two signals and a tree?