













Shopping Money Problems

cola - £1.05 	chocolate- £1.26 	crisps—17p 	biscuits— 64p 	toffees - 74p 	ice-cream £1.18p 
tomato sauce £2.14 	apple 14p 	lettuce—24p 	apple juice 74p 	pear 21p 	sandwich £2.29 

Find the cost:

1. Kieran buys a chocolate and a packet of crisps. How much does he pay?
2. Damian has £5.50. He wants to buy a sandwich, an ice-cream and two bottles of tomato sauce. How much more money does he need?
3. For Sam buys a sandwich and a pear. How much does he need?
4. Hussain buys two ice-creams, a packet of crisps and a cola. How much does it cost him?
5. Find the total price of two chocolates, toffees and tomato sauce.
6. Tom has £10. How many packets of crisps can he buy and how much change will he get?
7. How much will it cost to buy a lettuce, a chocolate a pear and toffees?
8. To make a salad, Stacey buys lettuce and an apple. How much does she need?

Change:

1. Thariq uses £5 to pay for tomato sauce and a cola. How much change does he get?
2. Ahmad uses £2 to pay for biscuits, crisps and an apple. How much change should he get?
3. If you use £10 to pay for apple juice and an ice-cream, how much change would you get?
4. Calculate the change I would get if I paid for an apple and toffees with £5
5. Petra uses £5 to buy 5 packets of crisps. How much will her change be?